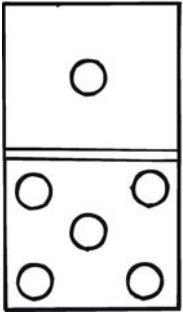


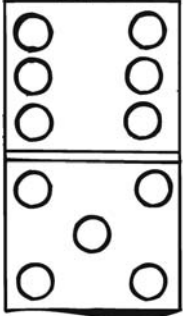
Maak een som van de dominosteen

© www.jufsanne.com

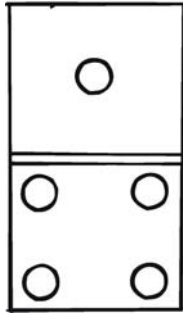
Kijk in het eerste vak voor een voorbeeld en schrijf of stempel het antwoord in het vak.



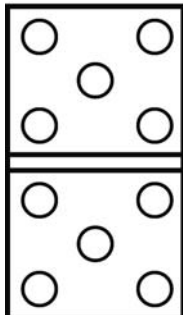
$$1 + 5 =$$



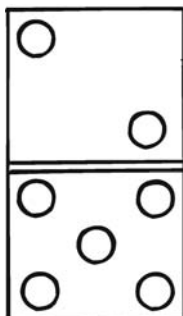
Blank space for writing the sum.



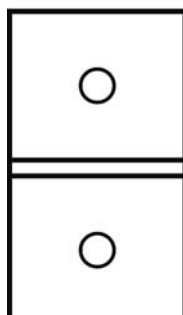
Blank space for writing the sum.



Blank space for writing the sum.



Blank space for writing the sum.



Blank space for writing the sum.