




Welk cijfer probeert de plant te verstoppen?



5 4 2 3




0 6 9 8




6 9 0 3



7 1 6 0



9 0 8 6



7 5 3 2